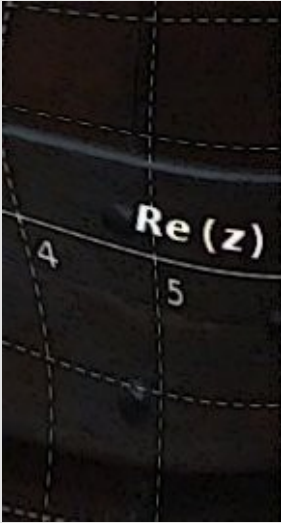


*Sets of complex numbers on the complex plane*

*Exercises, section 1*

## Complex plane (Gauss plane): Exercise 5



Represent the following sets on the complex plane:

$$M_a = \{ z \in \mathbb{C} \mid \operatorname{Re}(z) \geq 1 \}$$

$$M_b = \{ z \in \mathbb{C} \mid \operatorname{Im}(z) \geq -3 \}$$

$$M_c = \{ z \in \mathbb{C} \mid \operatorname{Re}(z) \geq -1, \operatorname{Im}(z) \geq 1 \}$$

$$M_d = \{ z \in \mathbb{C} \mid 1 \leq \operatorname{Re}(z) < 3 \}$$

$$M_e = \{ z \in \mathbb{C} \mid -3 \leq \operatorname{Re}(z) \leq 2, -1 < \operatorname{Im}(z) < 2 \}$$

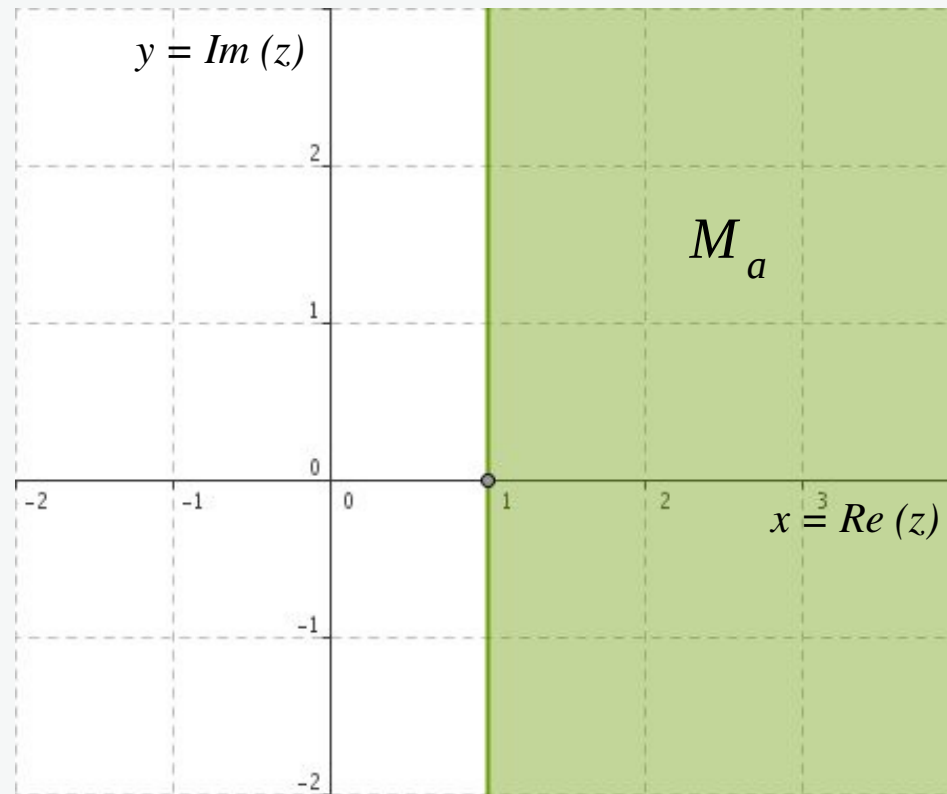
$$M_f = \{ z \in \mathbb{C} \mid \operatorname{Im}(z) - \operatorname{Re}(z) \leq 2 \}$$

$$M_g = \{ z \in \mathbb{C} \mid \operatorname{Re}(z) + \operatorname{Im}(z) = 1 \}$$

$$M_h = \{ z \in \mathbb{C} \mid |z| = 2 \}$$

$$M_i = \{ z \in \mathbb{C} \mid |z| < 2 \}$$

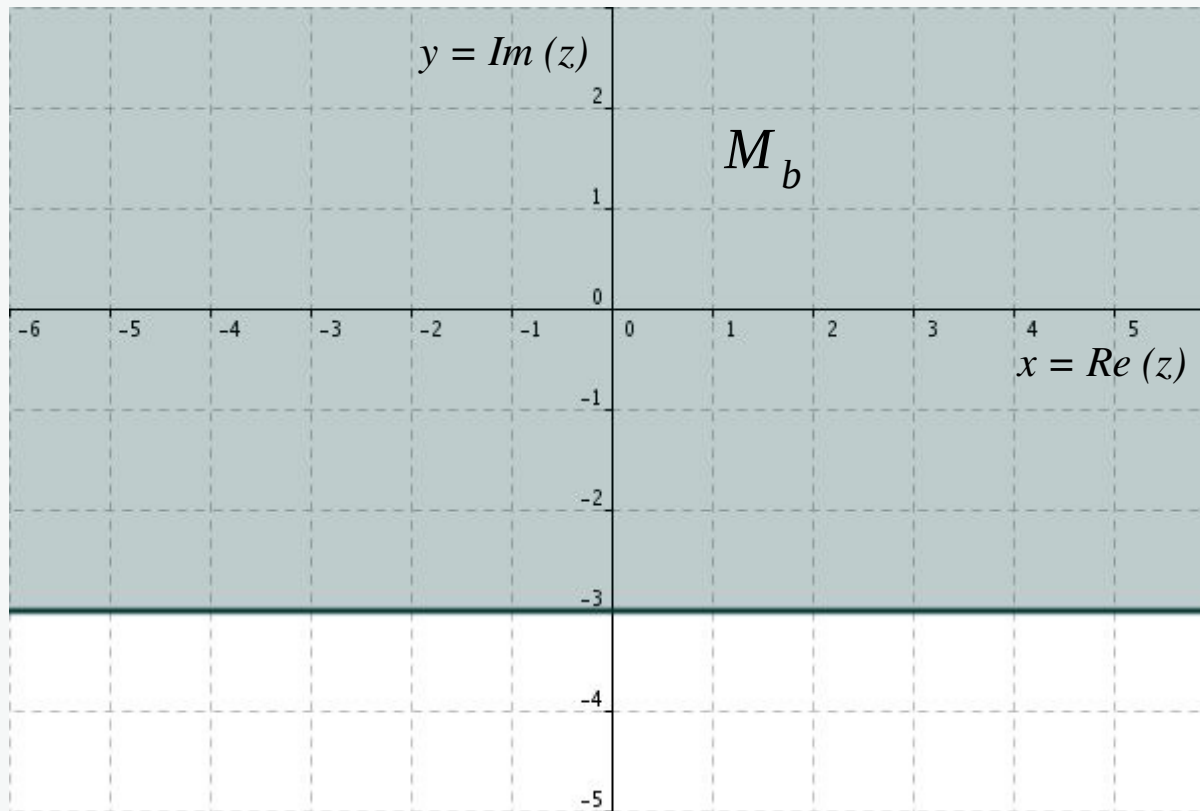
## Complex plane: Solution 5a



$$M_a = \{ z \in \mathbb{C} \mid \text{Re}(z) \geq 1 \}$$

$$z = x + i y, \quad \text{Re}(z) = x \geq 1$$

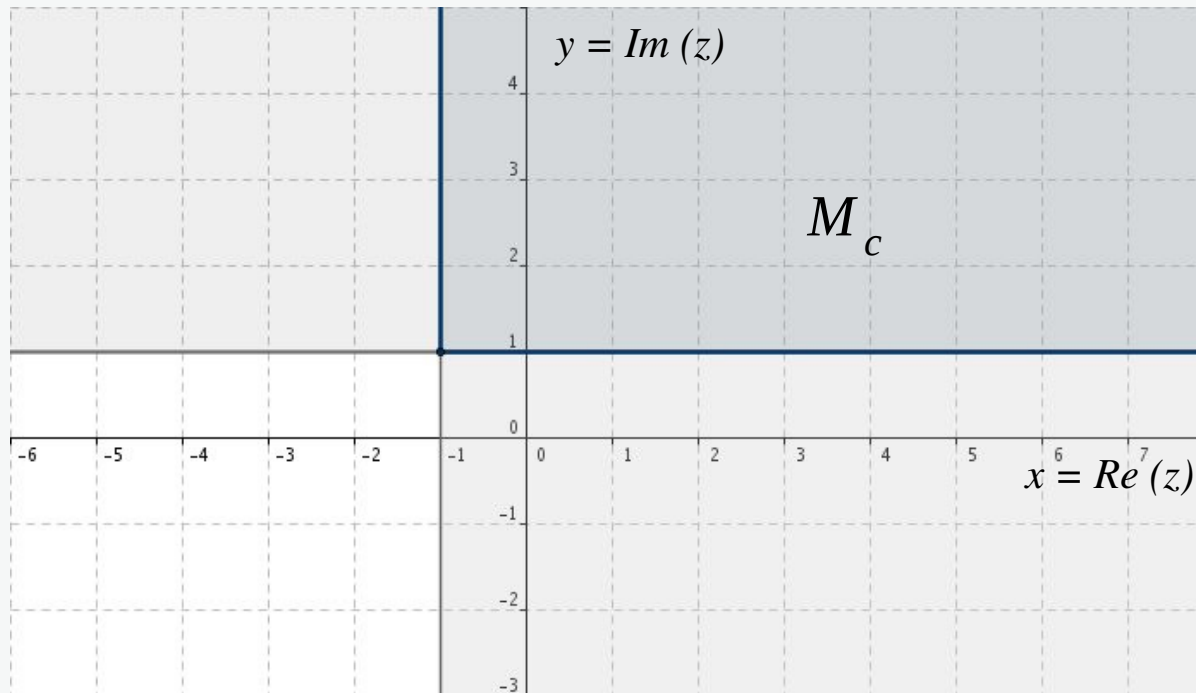
## Complex plane: Solution 5b



$$M_b = \{ z \in \mathbb{C} \mid \operatorname{Im}(z) \geq -3 \}$$

$$z = x + iy, \quad \operatorname{Im}(z) = y \geq -3$$

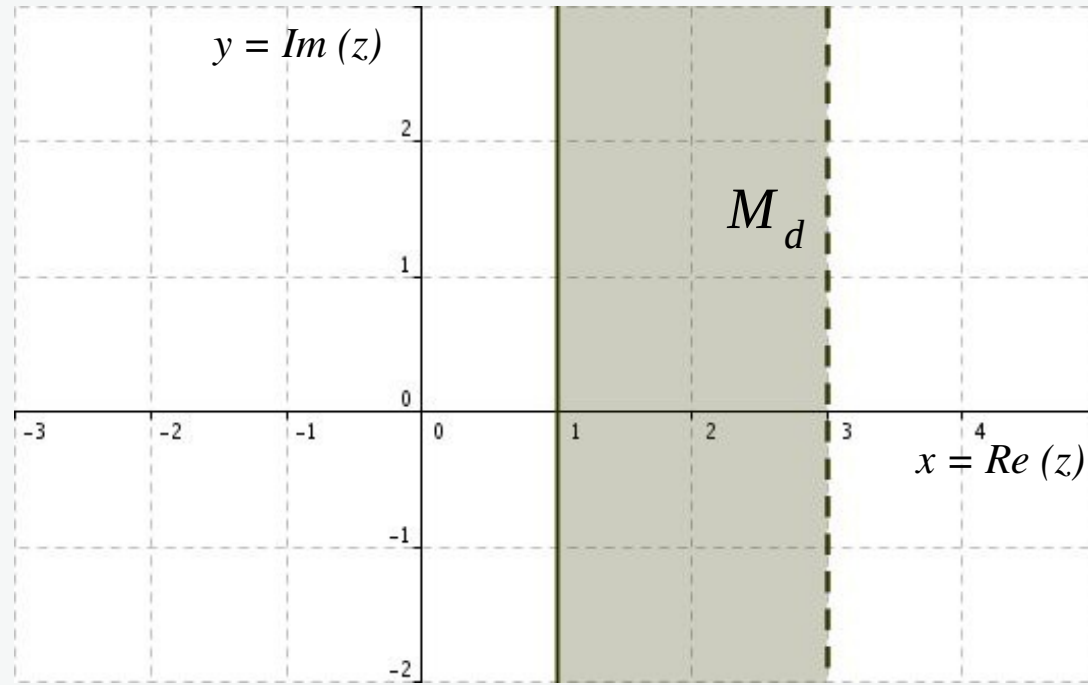
## Complex plane: Solution 5c



$$M_c = \{ z \in \mathbf{C} \mid \text{Re}(z) \geq -1, \text{Im}(z) \geq 1 \}$$

$$z = x + iy, \quad \text{Re}(z) = x \geq -1, \quad \text{Im}(z) = y \geq 1$$

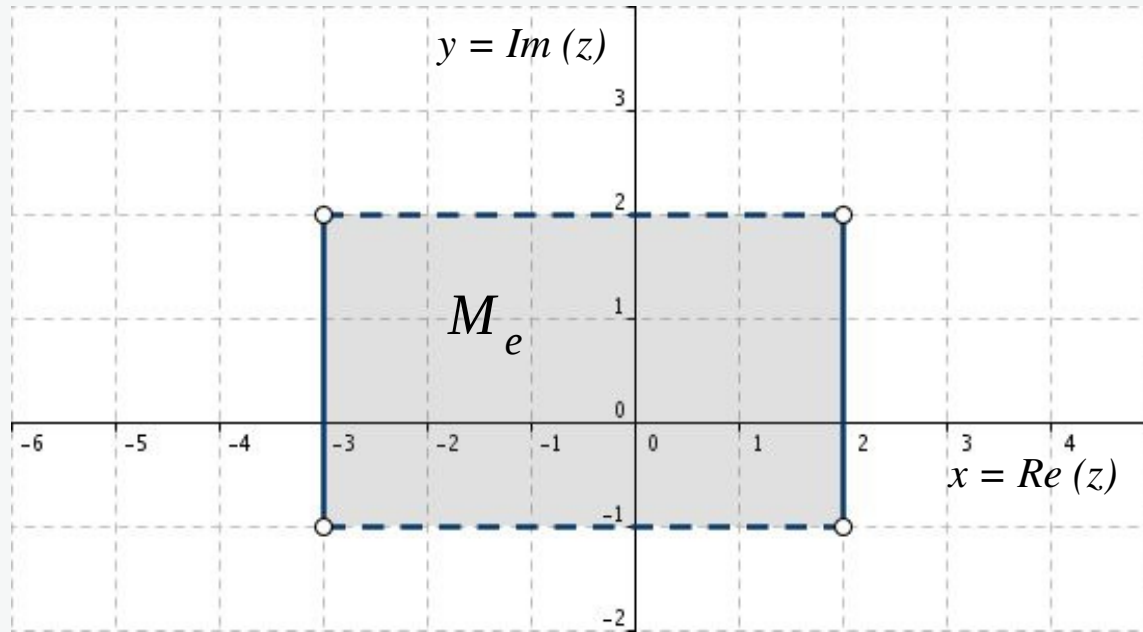
## Complex plane: Solution 5d



$$M_d = \{ z \in \mathbf{C} \mid 1 \leq \operatorname{Re}(z) < 3 \}$$

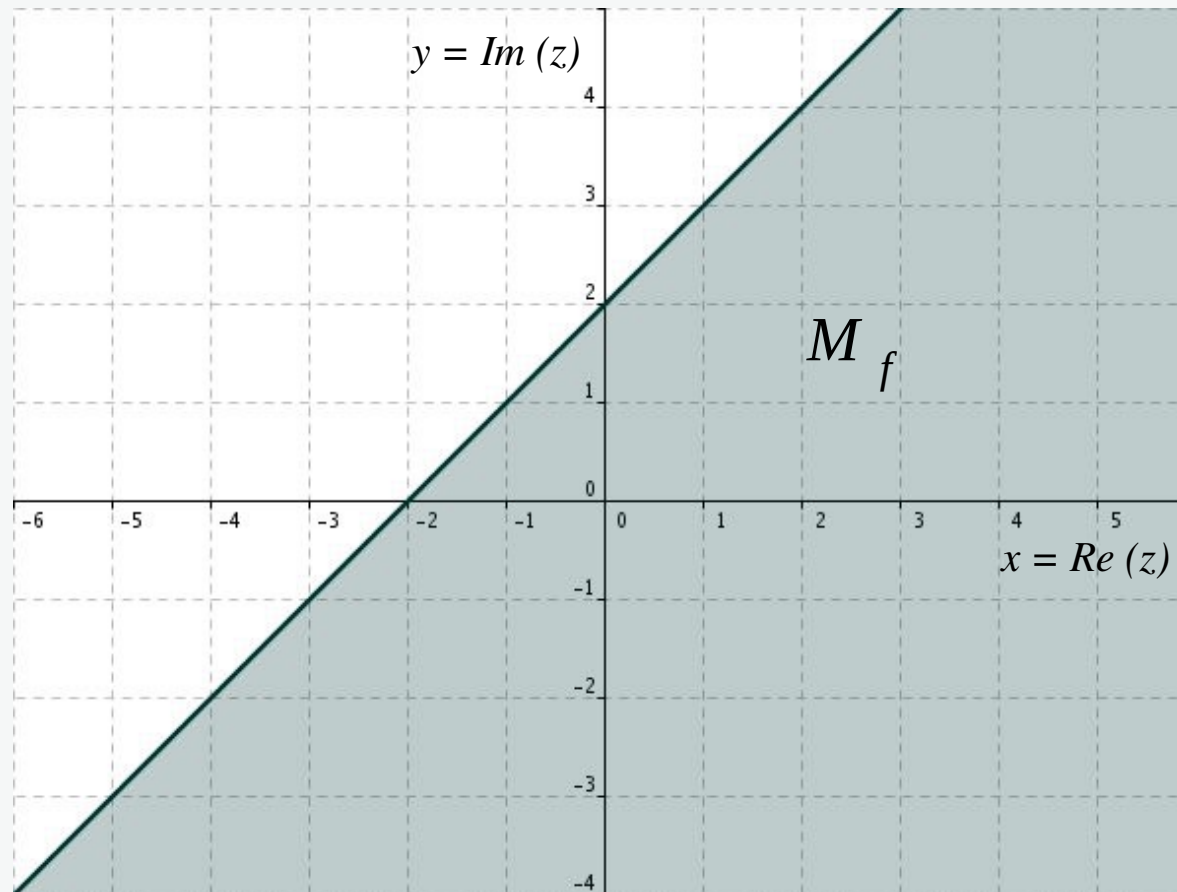
$$z = x + iy, \quad 1 \leq \operatorname{Re}(z) = x < 3$$

## Complex plane: Solution 5e



$$M_e = \{ z \in \mathbb{C} \mid -3 \leq \operatorname{Re}(z) = x \leq 2, \quad -1 < \operatorname{Im}(z) = y < 2 \}$$

## Complex plane: Solution 5f

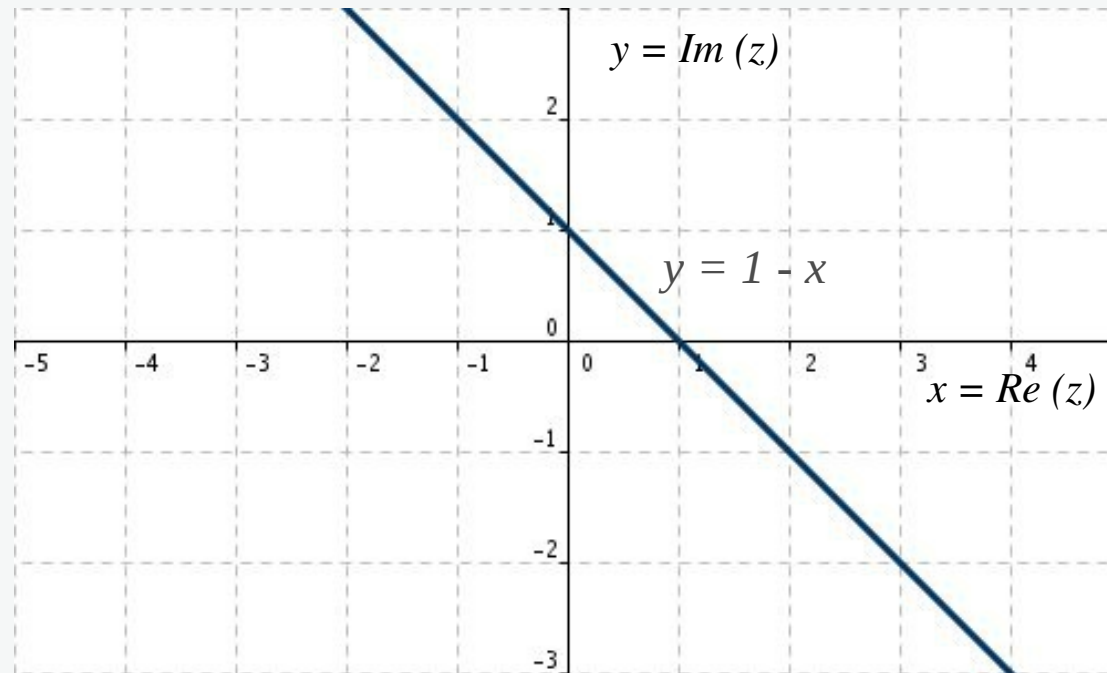


$$M_f = \{ z \in \mathbb{C} \mid \operatorname{Im}(z) - \operatorname{Re}(z) \leq 2 \}$$

$$\operatorname{Im}(z) - \operatorname{Re}(z) = y - x \leq 2$$



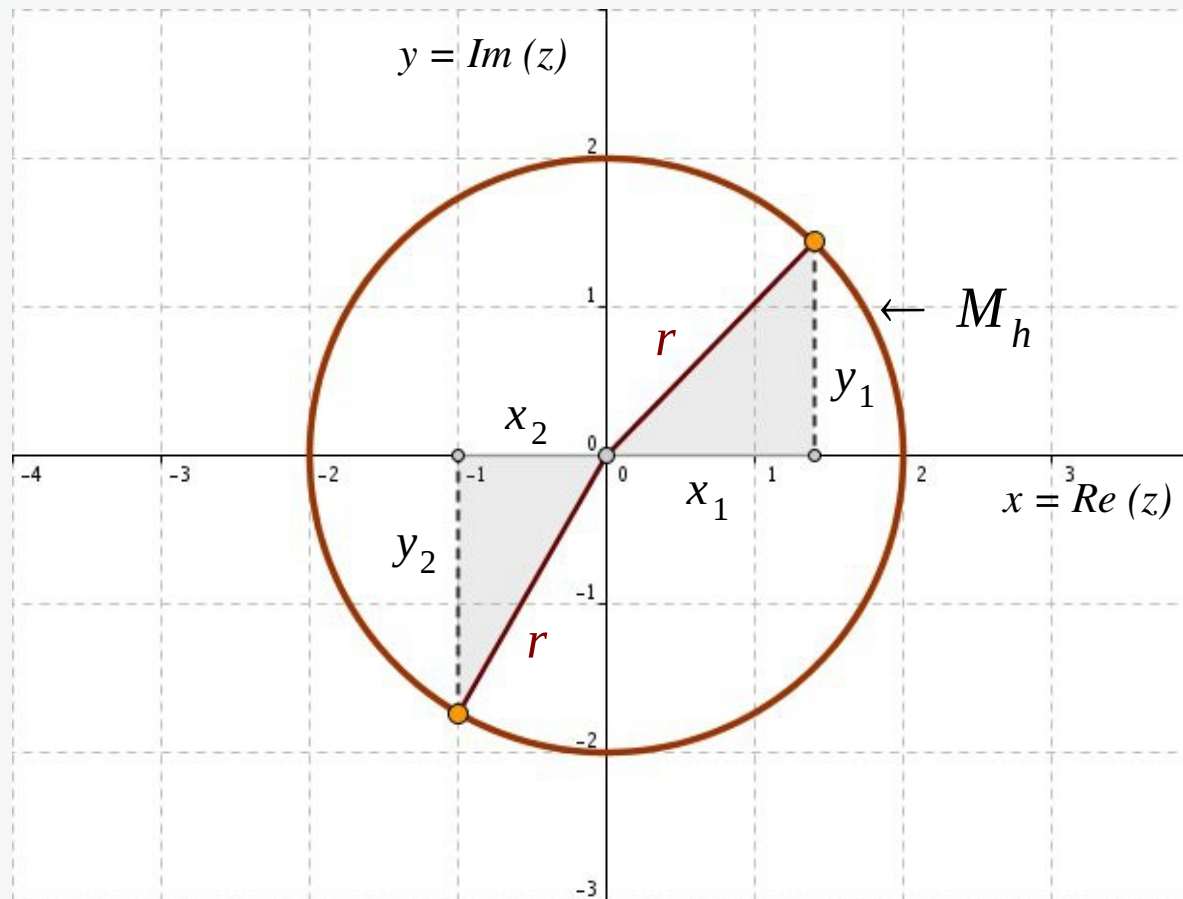
## Complex plane: Solution 5g



$$M_g = \{ z \in \mathbb{C} \mid \operatorname{Re}(z) + \operatorname{Im}(z) = 1 \}$$

$$\operatorname{Re}(z) + \operatorname{Im}(z) = x + y = 1 \quad \Leftrightarrow \quad y = 1 - x$$

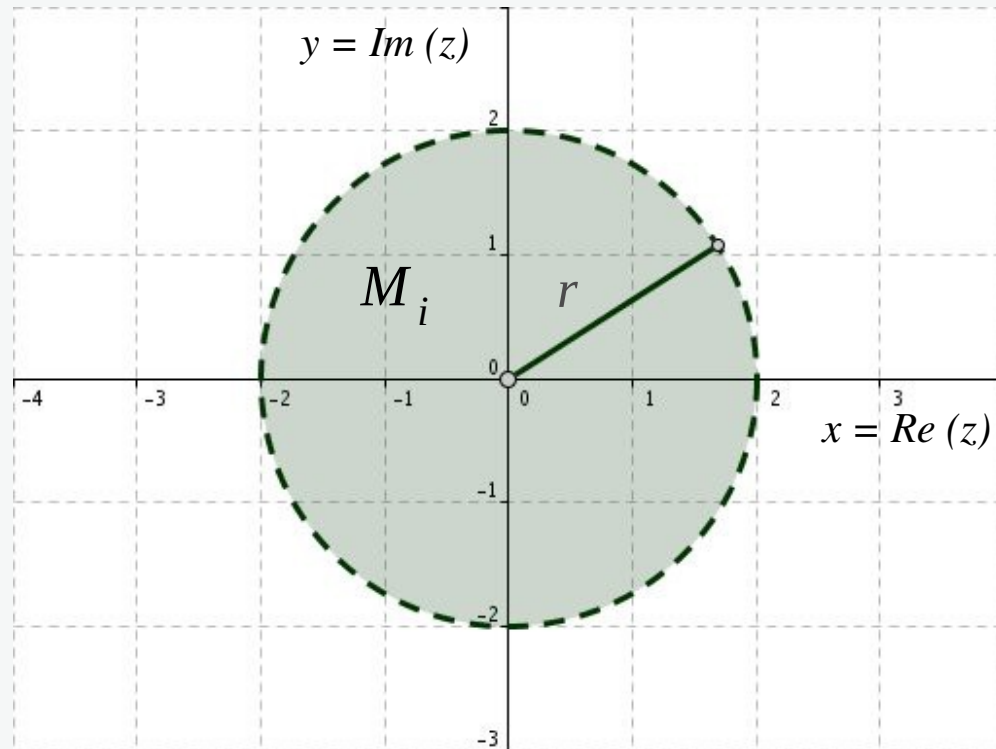
# Complex plane: Solution 5h



$$M_h = \{ z \in \mathbb{C} \mid |z| = 2 \}$$

$$|z| = \sqrt{x_1^2 + y_1^2} = \sqrt{x_2^2 + y_2^2} = r = 2$$

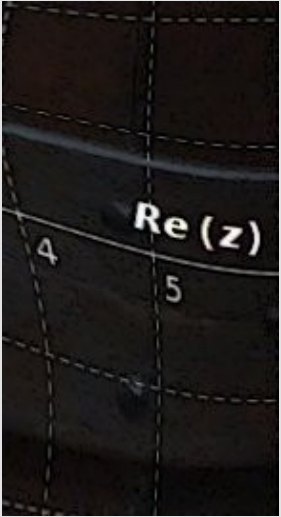
## Complex plane: Solution 5i



$$M_i = \{ z \in \mathbf{C} \mid |z| < 2 \}$$

$$|z| = \sqrt{x^2 + y^2} < 2$$

## Complex plane: Exercise 6



Represent the following sets on the complex plane:

$$M_a = \{ z \in \mathbb{C} \mid 1 \leq |\operatorname{Re}(z)| \leq 3, \quad 2 \leq \operatorname{Im}(z) \leq 4 \}$$

$$M_b = \{ z \in \mathbb{C} \mid |z| \leq 3, \quad \operatorname{Re}(z) \geq 0, \quad \operatorname{Im}(z) \geq 0 \}$$

$$M_c = \{ z \in \mathbb{C} \mid A \cap B \cap C \}$$

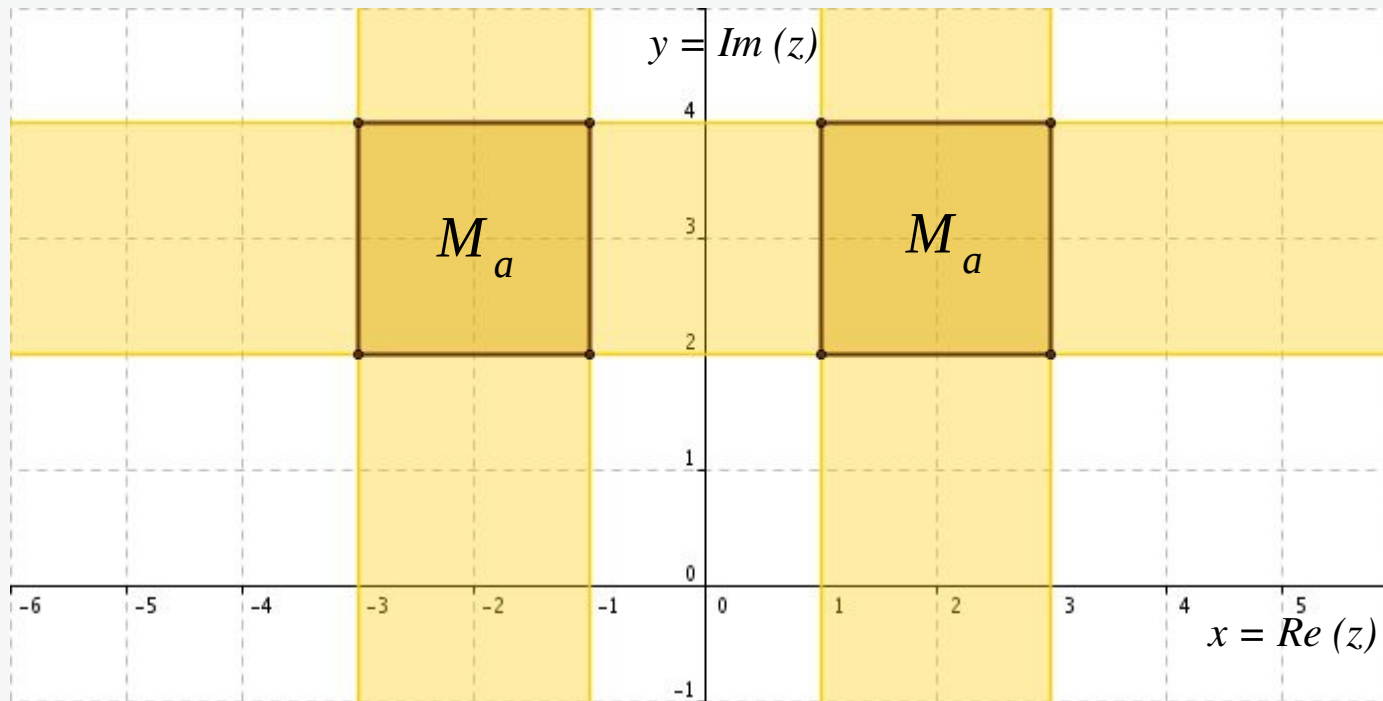
$$A : \operatorname{Re}(z) + \operatorname{Im}(z) \geq 1$$

$$B : -\operatorname{Re}(z) + \operatorname{Im}(z) \geq -3$$

$$C : \operatorname{Im}(z) \leq 4$$

$$M_d = \{ z \in \mathbb{C} \mid 1 \leq |z + 2 + i| \leq 2 \}$$

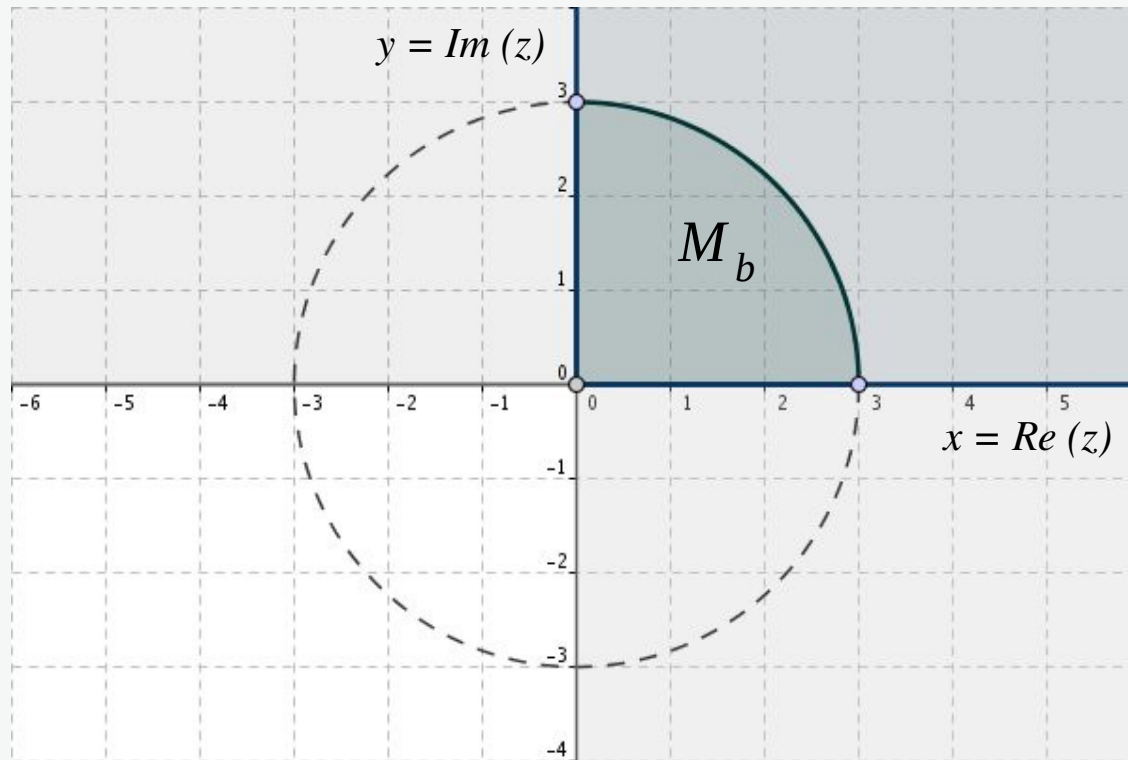
## Complex plane: Solution 6a



$$M_a = \{ z \in \mathbb{C} \mid 1 \leq |\operatorname{Re}(z)| \leq 3, \quad 2 \leq \operatorname{Im}(z) \leq 4 \}$$

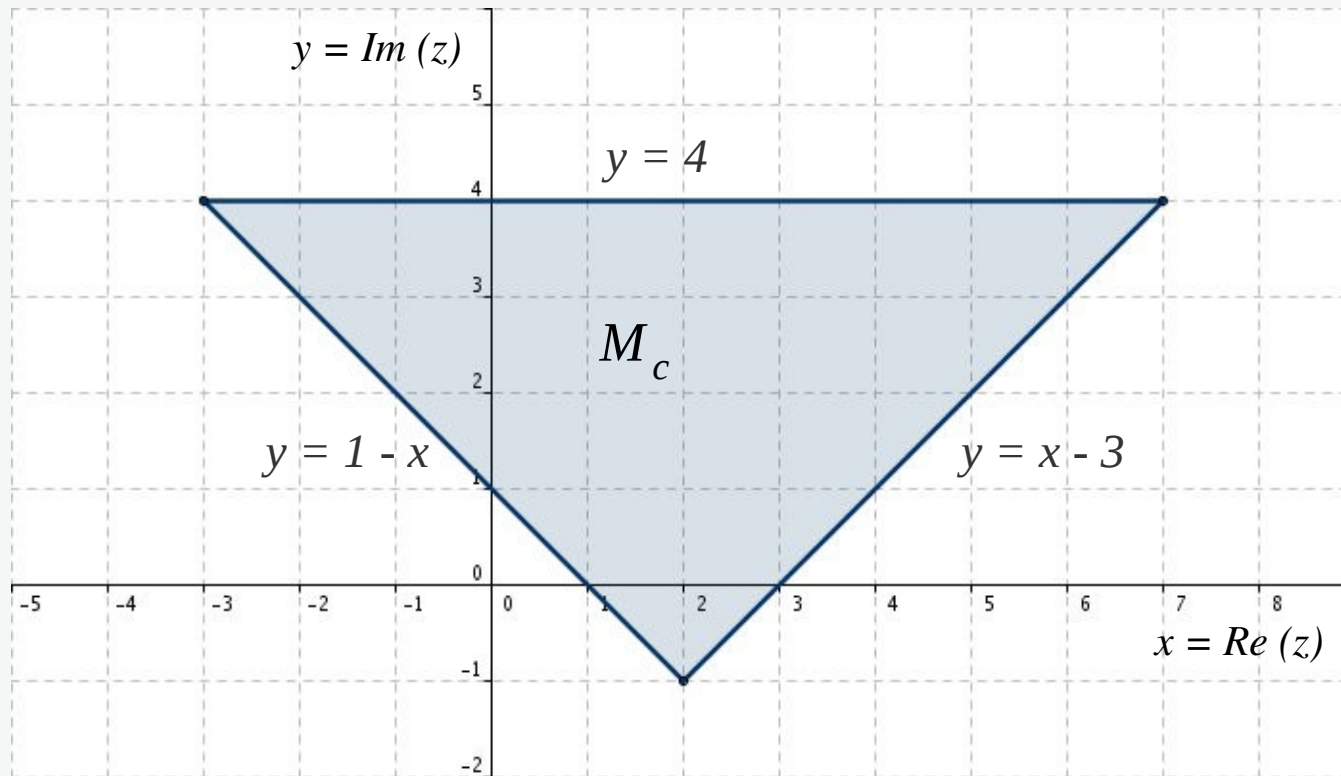
$$x \in [-3, -1] \cup [1, 3], \quad y \in [2, 4]$$

## Complex plane: Solution 6b



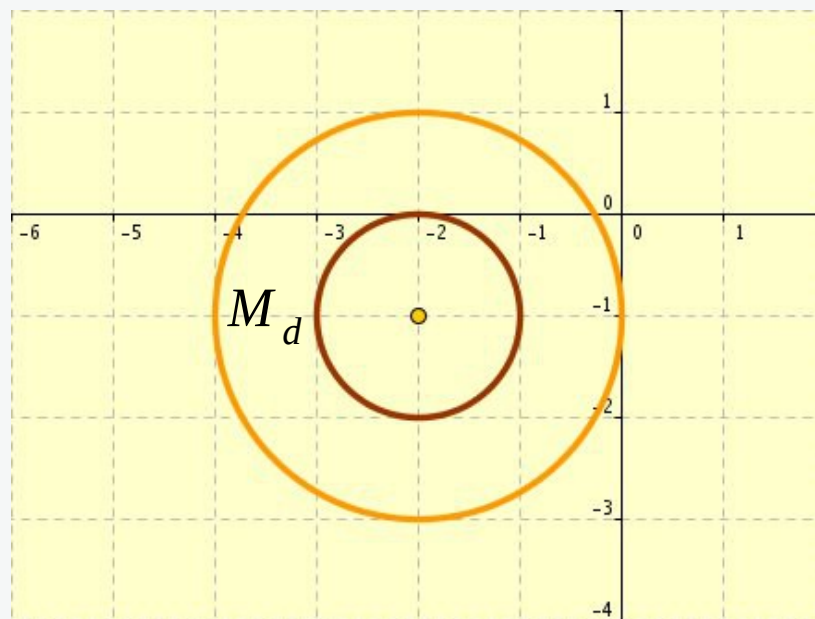
$$M_b = \{ z \in \mathbb{C} \mid |z| \leq 3, \operatorname{Re}(z) \geq 0, \operatorname{Im}(z) \geq 0 \}$$

## Complex plane: Solution 6c



$$M_c = \{ z \in \mathbb{C} \mid \operatorname{Re}(z) + \operatorname{Im}(z) \geq 1 \cap -\operatorname{Re}(z) + \operatorname{Im}(z) \geq -3 \cap \operatorname{Im}(z) \leq 4 \}$$

## Complex plane: Solution 6d



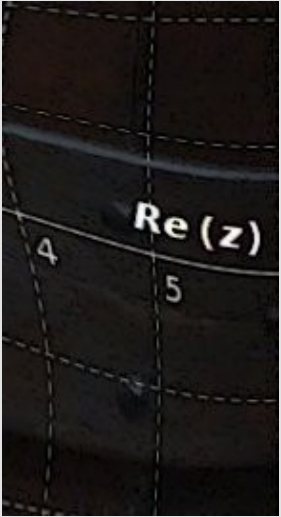
$$M_d = \{ z \in \mathbf{C} \mid 1 \leq |z + 2 + i| \leq 2 \}$$

$$z + 2 + i = (x + 2) + i(y + 1), \quad |z + 2 + i| = \sqrt{(x + 2)^2 + (y + 1)^2}$$

$$(x + 2)^2 + (y + 1)^2 = 1 \quad - \text{ circle with centre } P = (-2, -1) \text{ and radius } R = 1$$

$$(x + 2)^2 + (y + 1)^2 = 4 \quad - \text{ circle with centre } P = (-2, -1) \text{ and radius } R = 2$$





## Exercise 7:

Determine the geometric meaning of the equation below:

$$|z| = \operatorname{Re}(z) + 1$$

## Exercise 8: ●

Determine the geometric meaning of the following inequality:

$$|z - 1| \geq 2|z - i|$$

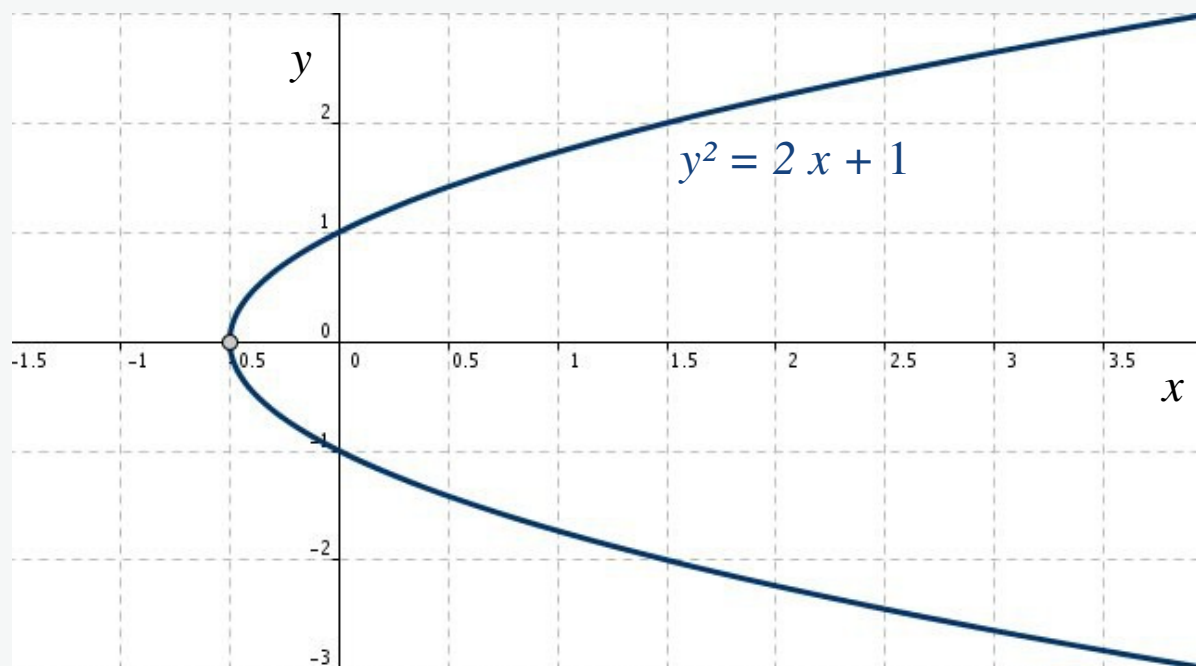
## Complex plane: Solution 7

$$|z| = \operatorname{Re}(z) + 1$$

$$z = x + iy, \quad |z| = \sqrt{x^2 + y^2}, \quad \operatorname{Re}(z) + 1 = x + 1$$

$$\Rightarrow \sqrt{x^2 + y^2} = x + 1, \quad x^2 + y^2 = (x + 1)^2 = x^2 + 2x + 1 \Rightarrow$$

$$y^2 = 2x + 1 \quad - \quad \text{equation of a parabola}$$



## Complex plane: Solution 8

$$|z - 1| \geq 2 |z - i|$$

$$|z - 1| \geq 2 |z - i| \Leftrightarrow |x - 1 + iy| \geq 2 |x + i(y - 1)| \Rightarrow$$

$$\sqrt{(x - 1)^2 + y^2} \geq 2 \sqrt{x^2 + (y - 1)^2}$$

$$(x - 1)^2 + y^2 \geq 4(x^2 + (y - 1)^2)$$

$$\left(x + \frac{1}{3}\right)^2 + \left(y - \frac{4}{3}\right)^2 \leq \frac{8}{9}$$

$$R = \sqrt{\frac{8}{9}} = \frac{2\sqrt{2}}{3}, \quad M = \left(-\frac{1}{3}, \frac{4}{3}\right)$$

The set of points, which obey the inequality, are all points inside a circle with radius  $R$  and centre point  $M$ .